

## Summer Assignment - Triangle Trigonometry

We start the class immediately with triangle trigonometry. I assume that you know how to do problems like these, and we go from here. We will have a quiz during the first week of class. Find the value of the trig function indicated.

1) Find  $\tan \theta$  if  $\cos \theta = \frac{12}{13}$

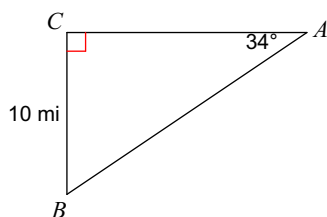
2) Find  $\tan \theta$  if  $\sin \theta = \frac{8}{17}$

3) Find  $\cos \theta$  if  $\sin \theta = \frac{5}{13}$

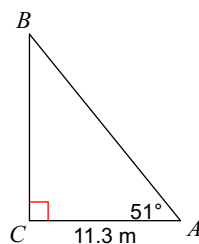
4) Find  $\cos \theta$  if  $\sin \theta = \frac{4\sqrt{3}}{7}$

Solve each triangle. Round answers to the nearest tenth.

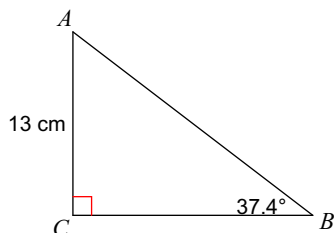
5)



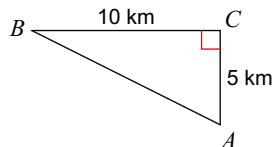
6)



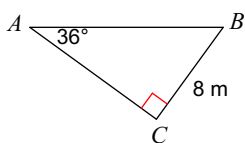
7)



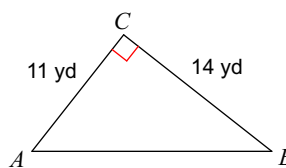
8)



9)

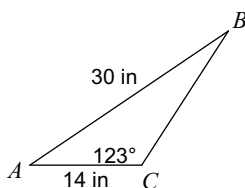


10)

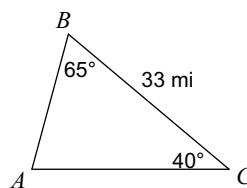


Solve each triangle. Round your answers to the nearest tenth.

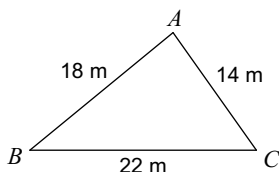
11)



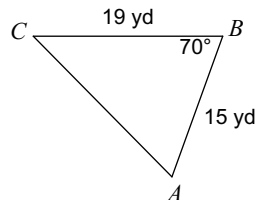
12)



13)



14)



## Answers to Summer Assignment - Triangle Trigonometry

1)  $\frac{5}{12}$

2)  $\frac{8}{15}$

3)  $\frac{12}{13}$

4)  $\frac{1}{7}$

5)  $m\angle B = 56^\circ$ ,  $b = 14.8$  mi,  $c = 17.9$  mi

6)  $m\angle B = 39^\circ$ ,  $a = 14$  m,  $c = 18$  m

7)  $m\angle A = 52.6^\circ$ ,  $a = 17$  cm,  $c = 21.4$  cm

8)  $m\angle B = 26.6^\circ$ ,  $m\angle A = 63.4^\circ$ ,  $c = 11.2$  km

9)  $m\angle B = 54^\circ$ ,  $b = 11$  m,  $c = 13.6$  m

10)  $m\angle A = 51.8^\circ$ ,  $m\angle B = 38.2^\circ$ ,  $c = 17.8$  yd

11)  $m\angle B = 23^\circ$ ,  $m\angle A = 34^\circ$ ,  $a = 20$  in

12)  $m\angle A = 75^\circ$ ,  $c = 22$  mi,  $b = 31$  mi

13)  $m\angle B = 39.4^\circ$ ,  $m\angle C = 54.7^\circ$ ,  $m\angle A = 85.9^\circ$

14)  $m\angle C = 45.6^\circ$ ,  $m\angle A = 64.4^\circ$ ,  $b = 19.8$  yd